
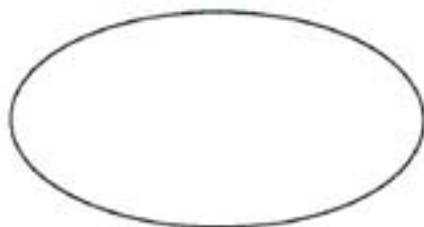


My wife bakes excellent chocolate chip cookies. Unfortunately, the number of chocolate chips in each cookie has lately been decreasing and therefore I have not been enjoying them as much. A cookie **MUST** have at least 3 chips in it to be enjoyable. Your task is to determine how many chocolate chips must be put into the mixture to make 6 cookies to ensure there are at least 3 chips in each of the cookies. Use the dice to simulate a chip for a particular cookie.

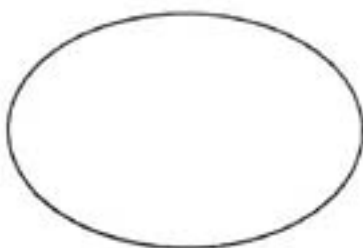
1.



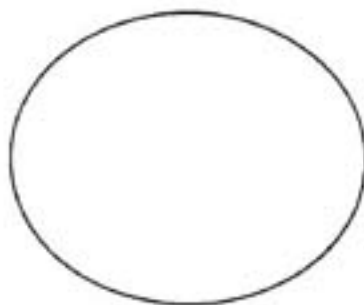
2.



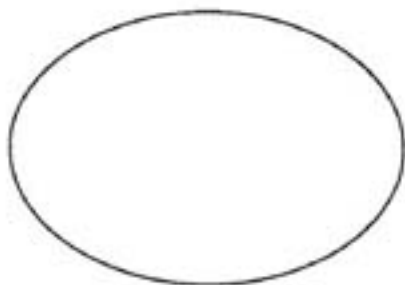
3.



4.



5.



6.

